

Year 1 Challenges

Summer 2





Year 1 Challenges

This booklet contains some activities linked to our topic for you to undertake this half term if you wish to. You may complete the booklet as slowly or as quickly as you wish.

Please return the booklet by Wednesday 15th July and your child will have the opportunity to talk to the class and show them what they have achieved at home.

If you wish to do more have a look at this website.

<http://www.bbc.co.uk/bitesize/ks1/maths/>



Phonics fun

Here are some nonsense words. Have a go at reading them and then make up some of your own in the space provided.

quaig

scime

strone

teribe

humbete

frighm

derate

hetter

croum

spoph


sproe

praw



Leaves

During this topic we will learn about local plants so please can you do a detailed drawing of 3 different leaves and tell us which tree or plant they belong to.





Sequencing

Below are some number sequences fill in the next 3 numbers in the sequence. Good luck.

4, 6, 8, 10, _____, _____, _____

13, 15, 17, 19, _____, _____, _____

10, 15, 20, 25, _____, _____, _____

10, 20, 30, 40, _____, _____, _____

11, 16, 21, 26, _____, _____, _____

3, 13, 23, 33, _____, _____, _____

65, 55, 45, 35, _____, _____, _____

90, 88, 86, 84, _____, _____, _____

23, 28, 33, 38, _____, _____, _____

43, 41, 39, 37 _____, _____, _____

54, 59, 64, 69 _____, _____, _____

19, 17, 15, 13 _____, _____, _____

Now have a go at making up your own sequence to test your Mum and Dad!

_____ , _____ , _____ , _____ , _____ , _____ , _____

_____ , _____ , _____ , _____ , _____ , _____ , _____


_____ , _____ , _____ , _____ , _____ , _____ , _____

_____ , _____ , _____ , _____ , _____ , _____ , _____



Route to school


As we will be looking at maps a lot in this topic why not have a go at making your own? Please draw a map of your route to school and include any geographical features like rivers, train tracks, churches, trees, plants, and home.





Your special place

We will be visiting a local church which is some Christian's special place, Do you have your own special place? For example your bedroom, local park, holiday memory or place you've been with someone special. Please draw a picture of your special place below.



In this box describe **why** this is your special place.



How much are these coins worth?



Show how many ways you can £1.



Work it out!

Show how you work it out

- draw pictures
- draw a number line
- write the calculation you would use

Anna found 12 leaves.

Hannah found 5 leaves

Georgia found 8 leaves.

Jenny found 16 leaves.

How many leaves did the girls find altogether?

Work it
out!

Show how you work it out

- draw pictures
- draw a number line
- write the calculation you would use

This is Amy's purse.



How much is in her purse?

Amy spent 35p on sweets.

How much money did she have left?